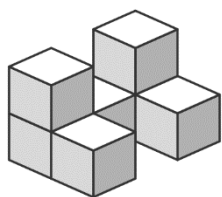
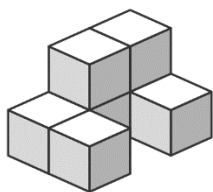
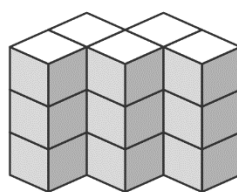
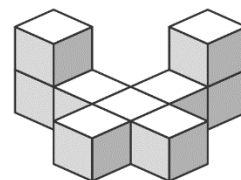


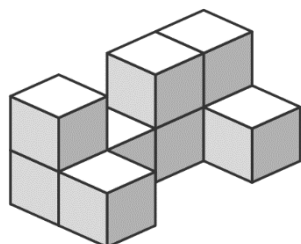
1. Kolik nejméně kostek je potřeba na tyto stavby?











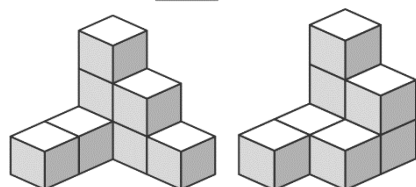




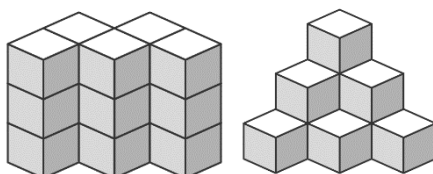


2. Zakroužkuj, ke kterým kostkám patří plán stavby.

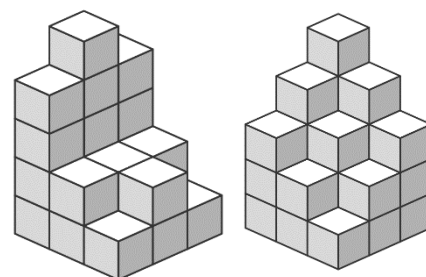
3	2
1	1
1	



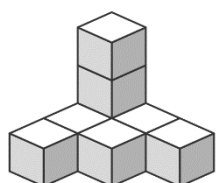
3	2	1
2	1	
1		



4	2	1
5	2	2
4	2	1




3. Zakroužkuj, podle kterého plánu jsou kostky postaveny.



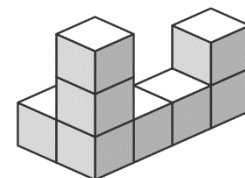
3	1	1
1		
1		

3	1	1
1	1	
1		



4	5	4
3	4	3
2	3	1

5	4	3
4	3	2
3	2	1



	2
	1
	1
1	3

	2
	1
1	3